

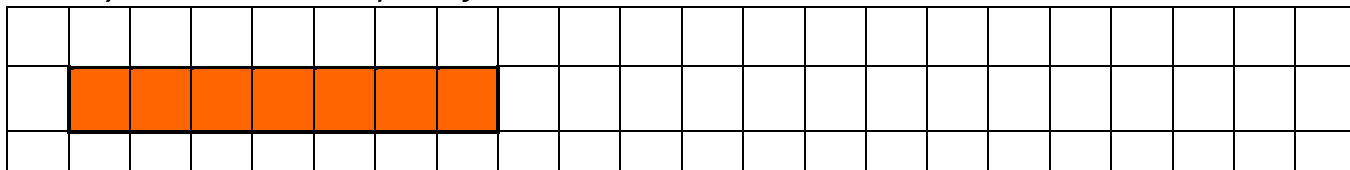
Strand: Numbers and Operations

Name: KEY

Skill Addressed: Area, Multiplication and Algebra

Block:

Activity: Multiples of x



If this diagram represents " x ", use the space below to draw:


a) $2x$

c) $5x$


b) $3x$

d) x^2


a)



c)



b)



d)

